


# Student Link

## Lesson Activity for Grade 4 Mathematics: Data Management

Student Name: \_\_\_\_\_

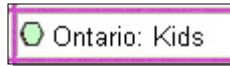
1. Click on the icon titled "Grade 4 door."



2. Click on the icon titled "Social Studies"



3. Under the category named "Canada and World Connections", click on the link titled "Ontario: Kids."



4. Click on the orange button titled "English."



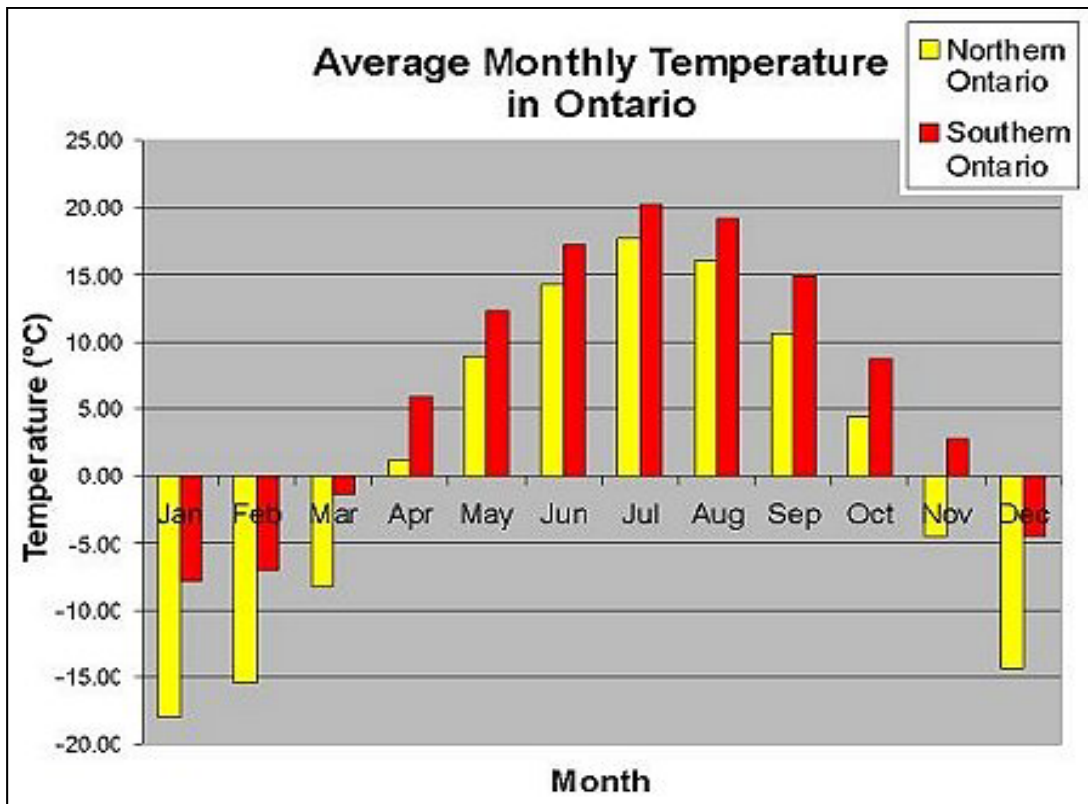
5. Click on the icon titled "Tour Ontario"



6. And then click on the link titled "Weather."



7. Find the graph below on the weather page.



Student Name: \_\_\_\_\_

8. Study the bar graph presented in Question number 7.

7. Answer the following questions after studying the graph.

Which month had the highest temperature for Southern Ontario ? \_\_\_\_\_ Temperature \_\_\_\_\_

Which month had the lowest temperature for Southern Ontario ? \_\_\_\_\_ Temperature \_\_\_\_\_

Which month had the highest temperature for Northern Ontario ? \_\_\_\_\_ Temperature \_\_\_\_\_

Which month had the lowest temperature for Northern Ontario ? \_\_\_\_\_ Temperature \_\_\_\_\_

What is the difference between the highest temperature in Southern Ontario and the highest temperature in Northern Ontario? \_\_\_\_\_ - \_\_\_\_\_ = \_\_\_\_\_

What is the difference between the lowest temperature in Northern Ontario and the lowest temperature in Southern Ontario? \_\_\_\_\_ - \_\_\_\_\_ = \_\_\_\_\_

For Southern Ontario, sequence the temperatures from lowest to highest.

\_\_\_\_\_

For Northern Ontario, sequence the temperatures from highest to lowest.

\_\_\_\_\_

8. Study the bar graph to the right and answer the following questions after studying the graph.

Which month had the most amount of precipitation for Southern Ontario ?

\_\_\_\_\_ mm

Which month had the least amount of precipitation for Northern Ontario ?

\_\_\_\_\_ mm

