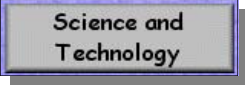
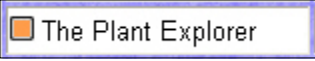








Student Name: \_\_\_\_\_




1.	In StudentLink, click on the <b>Grade 3 door</b> .	
2.	Click on <b>Science and Technology</b> .	
3.	Click on " <b>The Plant Explorer</b> ".	
4.	Follow the directions below and fill in the blanks with a pencil after you read the information.	



6.	Go to <b>FIND THE FLOWER.....</b>	 <b>Find the flower!</b>
7.	What colour are the flowers on the Buttercup?	
8.	What colour are the flowers on the Foxglove?	
9.	What colour are the flowers on the Fleabane?	
10.	What colour are the flowers on the Cow Parsley?	
11.	What is the name of the last flower shown?	
12.	Go to <b>Parts of the plant</b> .	 <b>Parts of the plant</b>
13.	Why do flowers often smell sweet?	
14.	Green leaves make sugar for the plant by using sunlight. What is this called?	
15.	What does the stem carry to the leaves and flower?	
16.	The root of the plant fixes the plant into the soil so it doesn't _____ over!	
17.	The root also takes up _____ from the soil.	

Student Name: \_\_\_\_\_

18.	Go to <b>EATING PLANTS</b>				
19.	Click the pictures and write down the names of the foods and drinks that come from plants. (hint there are 4)				
20.	Where can you eat watercress?				
21.	Bread is made from flour which is made from wheat. Wheat is a type of _____.				
22.	What fruits are on the plate? List them all:				
	<table border="1" style="width: 100%;"> <tr> <td style="width: 25%; height: 20px;"></td> <td style="width: 25%;"></td> <td style="width: 25%;"></td> <td style="width: 25%;"></td> </tr> </table>				

23.	Go to <b>PLANT GLOSSARY</b> .					
24.	After a flower has fertilized, the fruit will begin to _____ and _____. The fruit can contain one or more _____.					
25.	Is a tomato a fruit or a vegetable? _____.					
26.	What do leaves make for the plant? _____.					
27.	Photosynthesis is the process whereby the plants capture _____ from the _____ and combine it with _____ from the air and with _____ from the soil.					
28.	What two things do the roots absorb from the soil? _____ and _____.					
29.	The seeds of a plant can also be called : (5 other names)					
	<table border="1" style="width: 100%;"> <tr> <td style="width: 20%; height: 20px;"></td> <td style="width: 20%;"></td> <td style="width: 20%;"></td> <td style="width: 20%;"></td> <td style="width: 20%;"></td> </tr> </table>					
30.	What part of the plant lets the plant grow up towards the light? _____.					
31.	Go to <b>I DIDN'T KNOW I ATE THAT</b> .					
32.	What part of the plant are potato chips made from? _____.					
33.	When your parents drink tea, what part of the plant is it made from? _____.					
34.	When you eat beans, what part of the plant are you eating? _____.					
35.	When you eat strawberries, what part of the plant are you eating? _____.					
36.	When you eat rhubarb yoghurt, what part of the plant are you eating? _____.					
37.	When you eat cauliflower, what part of the plant are you eating? _____.					